



NAME _____

DATE _____

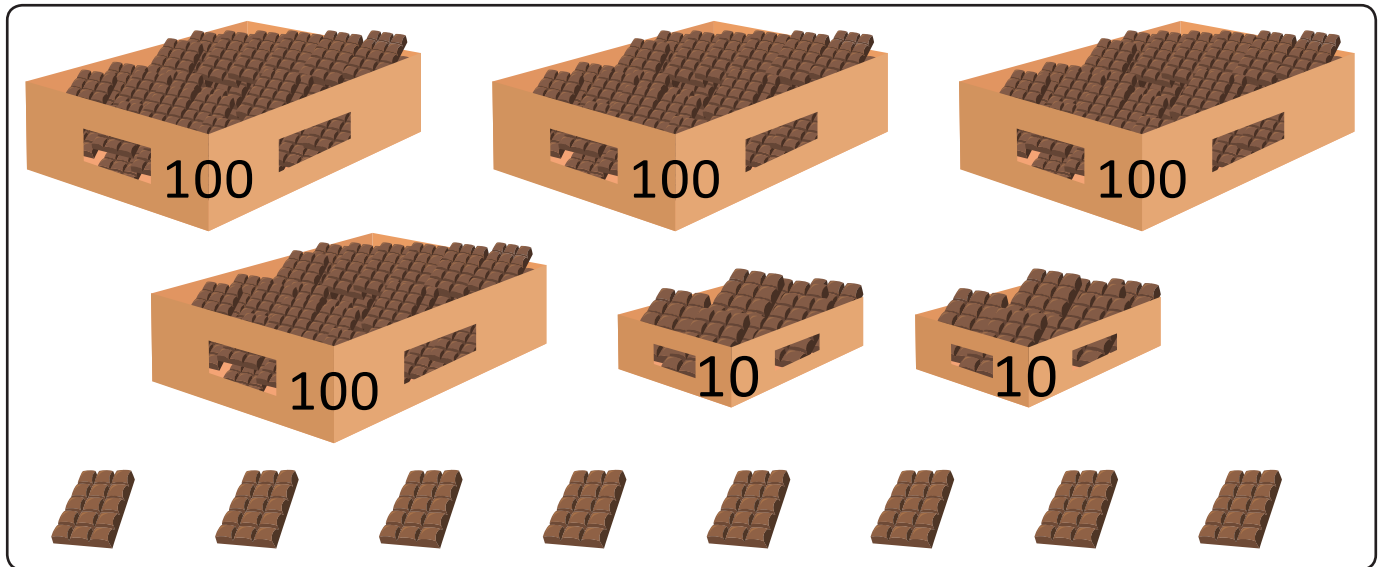
BUNDLE AND COUNT

Count up and down between 90 and 1000 using ones, tens and hundreds.

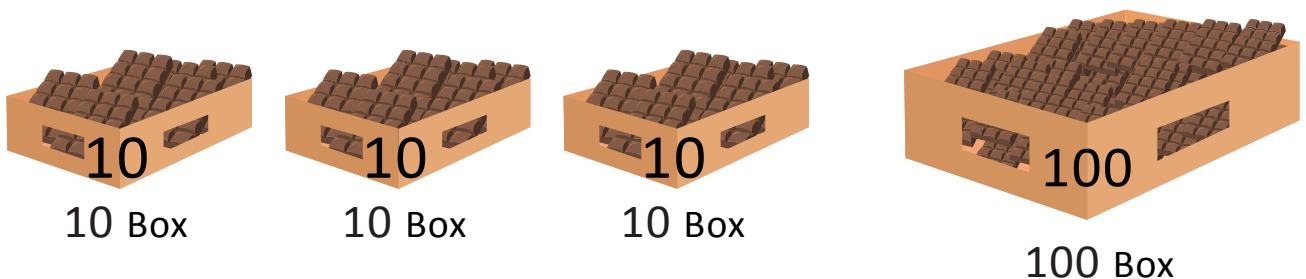
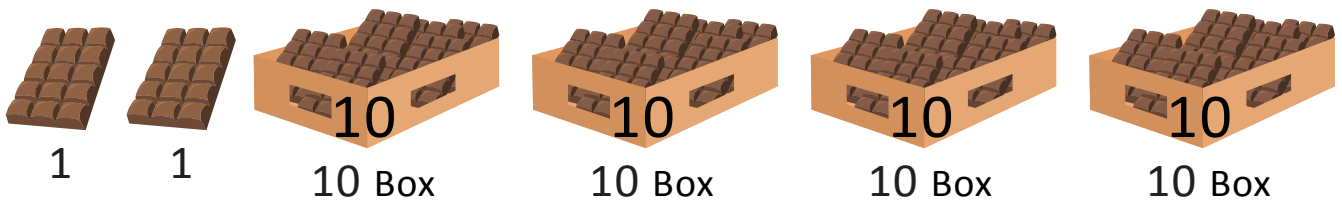
1. Draw, label, and box 428. Draw pictures of the units you use to count from 428 to 600.

Count from 428 to 600 we can write from 428 to 600 as follows.

428, 429, 430, 440, 450, 460, 470, 480, 490, 500, 600.



428 Box



$$\underline{\quad} + 1 + 1 + \underline{\quad} + 10 + \underline{\quad} + 10 + 10 + \underline{\quad} + 10 + \underline{\quad} = \underline{\quad}$$